




Flower Fractions



Miss Polly Had A Dolly

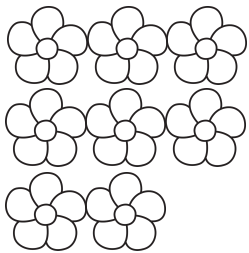
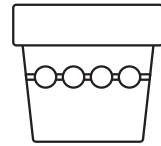
Some flowers for Miss Polly's dolly will help to cheer her up.



how many
do you have?

add $\frac{1}{2}$ the flowers
to the flower pot


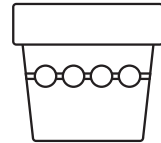
how many do
you have now?



how many
do you have?

add $\frac{1}{2}$ the flowers
to the flower pot


how many do
you have now?



how many
do you have?

add $\frac{1}{2}$ the flowers
to the flower pot

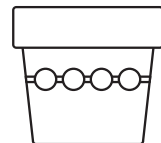
how many do
you have now?



how many
do you have?

add $\frac{1}{2}$ the flowers
to the flower pot

how many do
you have now?









Flower Fractions







Miss Polly Had A Dolly





follow the line to divide each flower in half



using a pencil or crayon, colour in half of each flower



follow the lines to divide each flower into quarters



using a pencil or crayon, colour in one quarter of each flower

